



18th NTST

NATIONAL TALENT SEARCH TEST (SAMPLE PAPER CLASS-3RD)



ENGLISH

Question No. 1 to 5 are based on the given text. Read the text carefully and answer the questions:

Gandhiji always loved his people—Muslims as much as Hindus. Even when Pakistan was formed, he spoke for the Muslims of India who were comparatively few in number. Many Hindus thought that he favoured the Muslims too much. Nathuram Godse held misguided ideas of this kind. At a prayer meeting at Birla House in New Delhi, Godse shot Gandhiji on 30th January, 1948. The Great Mahatma died with 'Hey Ram' on his lips. He was murdered, yet he was calm and peaceful even in death. It seemed as if he were sleeping.

- Q.1 Which two religions are mentioned in the passage?
- A) Jainism
B) Hinduism
C) Both Hinduism and Islamism
D) Islamism
- Q. 2 Who shot Gandhiji?
- A) Kalooram Godse
B) Vikram Godse
C) Nathuram Godse
D) Shivlal Godse
- Q. 3 Who died with Hey Ram on his lips?
- A) Mahatma Gandhi
B) Subhash Chandra Bose
C) Jawahar lal Nehru
D) Bhagat Singh
- Q. 4 Who were less in number?
- A) Buddhists
B) Hindus
C) Jains
D) Muslims
- Q.5 When did Gandhiji die?
- A) 1947
B) 1948
C) 1946
D) 1949
- Q.6 The taxi can take you to the airport for an extra charge . (Choose the helping verb)
- A) An
B) For
C) You
D) Can
- Q.7 He attend the seminar tomorrow. (Verb tense)
- A) attends
B) was attending
C) will attend
D) attended

Q.8 Look at the picture of the given below. Time is mentioned alongside. Based on that tell which tense will be appropriate.



- A) Manoj will be listening to music.
- b) Manoj was listening to music.
- c) Manoj is listening to music.
- d) Manoj listens to music.

Q.9 Put 'article' after looking at the picture.



- a) An
- b) The
- c) It
- d) A

Q.10 Choose the pair that does not go together.

cup and saucer, thick and thin, doors and window, fat and fine

- a) thick and thin
- b) cup and saucer
- c) fat and fine
- d) doors and window

MATH

Q.1 Rohan likes orange candies, out of 35 orange candies, Rohan consumed one-fifth. How many Orange candies are left?

- a. 7
- b. 14
- c. 21
- d. 28

Q.2 Choose a smallest number of 4 digits by using digits 3,9,0,1 only once.

- a. 1039
- b. 0139
- c. 9301
- d. 1309

Q.3 Shalini starts practicing the drum at 9:10 a.m. He finishes practicing 35 minutes later. Which clock shows the time Shalini finishes practicing? Select the correct answer.

a.



b.



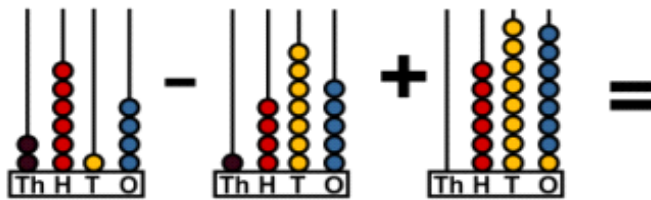
c.



d.



Q.4 Help Seema to solve the following problem



- a. 1,401
- b. 1,936
- c. 1,827
- d. 2,435

Q.5 The capacity of the fuel tank of a truck is 95 L. It contains 86 L 565 mL of diesel. How much more diesel can it hold?

- a. 10L 335 mL
- b. 9 L 435 mL
- c. 11L 335 mL
- d. 8 L 435 mL


Q.6 Which of the given options shows the correct expanded form of 7903?

- a. $700 + 900 + 0 + 3$
- b. $7,000 + 900 + 0 + 3$
- c. $7,000 + 0 + 90 + 3$
- d. $7,000 + 900 + 0 + 30$

Q.7 Which of these is same as $3945 - 1540$?

- a. $1780 + 1345$
- b. $1250 + 1155$
- c. $2790 - 255$
- d. $3780 - 1275$

Q.8 Ruby drew a set of squares and coloured a few squares. What fraction of the figure is unshaded?



- a. $\frac{1}{5}$
- b. $\frac{2}{5}$
- c. $\frac{3}{5}$
- d. $\frac{2}{3}$

Q.9 The Sharma family are going on a 5-day vacation. If the family leaves on Tuesday, what day of the week will they return?

- a. Friday
- b. Sunday
- c. Monday
- d. Saturday

Q.10 Look at image and answer: Number of objects that resemble a cuboid.

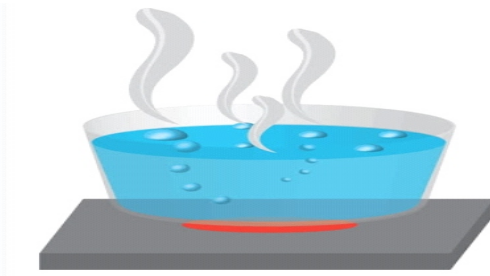


- a.1
- b.2
- c.3
- d.4

Q.1 An object's shadow is the shortest at _____.

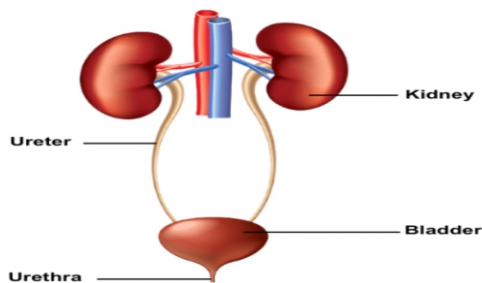
- a. Morning
- b. Evening
- c. Noon
- d. Night

Q.2 Observe the picture shown below and identify the process by which water is heated and changes into steam:



- a. Condensation
- b. Evaporation
- c. Transpiration
- d. Photosynthesis

Q.3 Observe the picture carefully and identify the system




- a. circulatory system
- b. excretory system
- c. nervous system
- d. skeletal system

Q.4 Early humans tied logs together to make a _____

- a. cart
- b. ship
- c. raft
- d. None of these

Q.5 If you want to travel from Ludhiana to Japan in the shortest possible time, which of the following mode of transport would you use?




a. plane

b. car

d. ship

d. train

Q.6 Given below are pictures of different birds: Which of them is/are the flightless bird(s)?




a. Only a

b. Only d

c. Both b and d

d. Both b and c

Q.7 All are natural things expect



Q.8 Bigger families with grandparents, uncle, aunt and cousins is called a _____

a. joint family

b. nuclear family

c. single family

d. None of these

Q.9 ATM is used for withdrawing

a. milk

b. water

c. shoes

d. money

Q.10 There are _____ states in India

a. 27

b. 29

c. 28

d. 30

G.K

Q1. Dhokla is the famous dish of which state in India?

a) Punjab

b) Gujarat

c) Haryana

d) Himachal Pradesh

Q2. Which of the following diseases is transmitted to humans by a dog bite?

- a) Swine flu
- b) Rabies
- c) Avian influenza
- d) Ebola virus

Q3. How many planets are there in our solar system?

- a) 7
- b) 10
- c) 8
- d) 9

Q4. If light is called morning, morning is called night, night is called afternoon, afternoon is called noon, then when do we sleep?

- a) Morning
- b) Noon
- c) Night
- d) Afternoon

Q5. Which of the following states is known as the Rice Bowl of India?

- a) Assam
- b) Arunachal Pradesh
- c) Bihar
- d) Andhra Pradesh