

Q.7 Carla will sing in school today. (Tense)

a) Future

b) Simple Present

c) Present

d) Past

Q.8 My sister - in - law work every day for 6 hours. (Verb tense)

a) working

b) will work

c) worked

d) works

Q.9 Julia quickly ran to the grocery store. (Find the adverb)

a) ran

b) grocery

c) store

d) quickly

Q.10 Match the following:

Column A	Column B
(i) Ben has ___ terrible headache.	(a) No article
(ii) Carol's father works as ___ electrician.	(b) a
(iii) ___ rich are not always happy.	(c) an
(iv) I have borrowed ___ money from her before.	(d) The

Q.1 Which of the following is false?

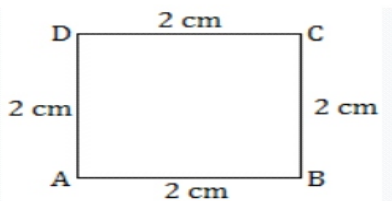
- | | |
|---------------|---------------|
| a) $15 = XV$ | b) $19 = XIX$ |
| c) $25 = XXV$ | d) $30 = XXX$ |

Q.2 What is the largest seven-digit number that can be formed using the given below digits?

0, 7, 2, 4, 9, 8, 3

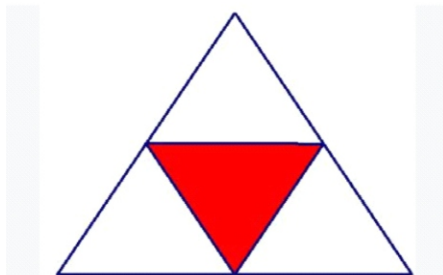
- | | |
|------------|------------|
| a) 9874320 | b) 0987432 |
| c) 9874302 | d) 9820347 |

Q.3 The perimeter of the given figure is _____



- | | |
|---------|----------|
| a) 6cm | b) 12 cm |
| c) 8 cm | d) 10 cm |

Q.4 What fraction of the figure is shaded?



- | | |
|------------------|------------------|
| a) $\frac{2}{4}$ | b) $\frac{4}{6}$ |
| c) $\frac{5}{6}$ | d) $\frac{1}{4}$ |

Q.5 Shreya had 278 toys. She gave some toys to Kriti and had 135 toys left with her. What was the total number of pencils Shreya gave to Kriti ?

- | | |
|--------|--------|
| a) 123 | b) 136 |
| c) 143 | d) 179 |

Q.6 Every prime number except _____ is odd

- a) 0
- b) 2
- c) 4
- d) 10

Q.7 237 paise is equal to

- a) Rs 2.03
- b) Rs 2.037
- c) Rs 2.37
- d) Rs 2.307

Q.8 2 L 240ml = _____ ml







- a) 2400 ml
- b) 440 ml
- c) 2440 ml
- d) 2240ml

Q.9 When a number is put into the machine below, a different number comes out. If 2 goes in, 10 comes out. If 4 goes in, 20 comes out. If 5 goes in, 25 comes out.

If 8 goes in, what number should come out?

- a) 10
- b) 20
- c) 30
- d) 40

Q.10 Study the following pictograph:

Favourite beverages	Number of people  = 3 person
Tea	
Coffee	
Green tea	
Iced tea	
Cold coffee	

How many people like coffee?

- a) 18
- b) 21
- c) 28
- d) 30

SCIENCE

Q.1 Tall, straight and needle – like leaves bearing plant grows on _____.

- (a) mountain
- (b) plains
- (c) both (a) and (b)
- (d) none of these

Q.2 _____ is soluble in water.

- (a) stone
- (b) plastic
- (c) salt
- (d) none of these

Q.3 we need _____ hours of sleep per day

- a) 5 to 6
- b) 12 to 14
- c) 8 to 10
- d) 2 to 4

Q.4 _____ has no seeds in the fruit.

- a) Mango
- b) Bananas
- c) Orange
- d) Lemon

Q.5 Identify the swimming birds

a)



b)



c)



d)



Q.6 Which of the following is an example of a solid?

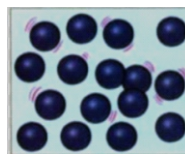
- a) Water
- b) Air
- c) Ice
- d) Gasoline

Q.7 Matter exists in three states. Which of the following figures shows the arrangement of particles in a solid state?


a)




b)



c)



d)



Q.8 Fish breathe through _____

a) lungs

b) gills

c) skin

d) stomata

Q.9 What type of material is used for making rain coats in India?

a) silk

b) cotton

c) woollen

d) waterproof

Q.10 Which of the following picture showing the activity to save

a)



b)



c)



d)



G.K

Q1. Bharatanatyam is the classical dance of which Indian state?

a) Andhra Pradesh

b) Tamil Nadu

c) Kerala

d) Odisha

Q2. How many Lions are there in the national emblem of India?

a) 5

b) 2

c) 3

d) 4

Q3. Which of the following is the oldest stone structure in India?

a) Qutub Minar

b) Sanchi Stupa

c) Red fort

d) Taj Mahal

Q4. What is the name of the capital of Jharkhand?

a) Ranchi

b) Jaipur

c) Gandhinagar

d) Patna

Q5. If the day before yesterday was Friday, what day will be day after tomorrow?

a) Thursday

b) Friday

c) Wednesday

d) Tuesday